
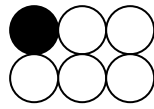


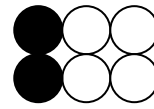
# Plusaufgaben bis 6




$3 + 3 =$  \_\_\_\_\_




\_\_\_\_\_



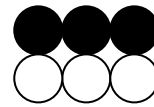
\_\_\_\_\_



\_\_\_\_\_



\_\_\_\_\_



\_\_\_\_\_

$2 + 2 =$

$2 + 4 =$

$4 + 1 =$

$1 + 2 =$

$5 + 0 =$

$3 + 1 =$

$1 + 5 =$

$0 + 6 =$

$2 + 3 =$

$1 + 4 =$

$5 + 1 =$

$4 + 2 =$

$3 + 3 =$

$3 + 0 =$

$4 + 0 =$

